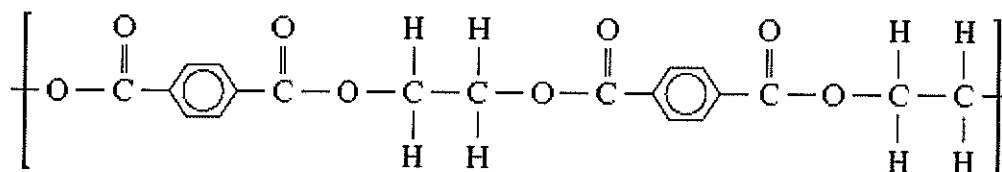


CARBON CHEMISTRY: Answer all questions


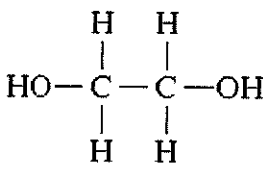
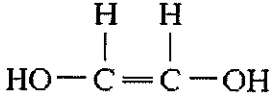
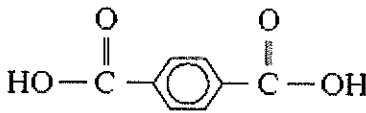
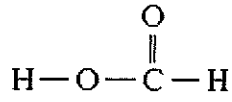

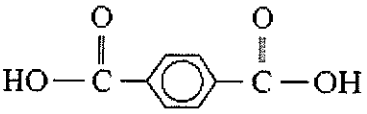
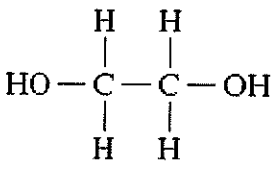
PART A: Multiple Choice Questions. (10 marks)

- Q1. A non-cyclic alkane with **four** carbon atoms has:
- A. molecular mass of 48
 - B. four carbon to carbon bonds
 - C. eight carbon to hydrogen bonds
 - D. two isomers
- Q2. 1-pentene and 2-pentene are two isomers of C_5H_{10} . A third isomer of C_5H_{10} is
- A. 3-pentene
 - B. cyclopentane
 - C. methylbutane
 - D. 1-pentyne
- Q3. Methane gas is reacted with excess chlorine in the presence of sunlight. A mixture of chlorinated hydrocarbons is formed. If they are separated by distillation, the **first** compound to be collected will be
- A. tetrachloromethane
 - B. trichloromethane
 - C. dichloromethane
 - D. monochloromethane
- Q4. A certain organic compound has a molecular formula of $C_4H_8O_2$. The compound does **NOT** cause an acidified potassium dichromate solution to turn green but does liberate a colourless gas on addition of sodium metal. Which one of the following is the correct IUPAC name for this compound?
- A. butanone
 - B. 2 - methyl - 2 - propanol
 - C. butanoic acid
 - D. butanal
- Q5. One litre of gaseous hydrocarbon requires 3 litres of oxygen for its complete combustion and besides water forms 2 litres of carbon dioxide (the volumes of all gases being measured at the same temperature and pressure).
- The formula for the hydrocarbon is
- A. C_2H_4
 - B. CH_4
 - C. C_2H_2
 - D. C_3H_6

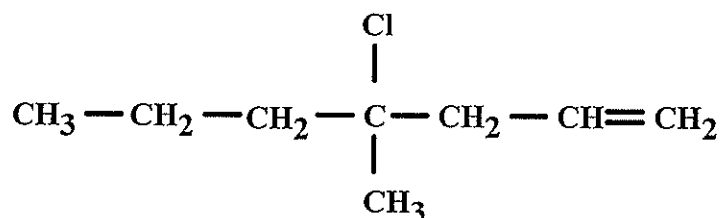
Q6. Terylene (polyester) is a condensation polymer. Part of the structure of the polymer is shown.



What are the two monomers that form this polymer?

	<i>Monomer 1</i>	<i>Monomer 2</i>
(A)		
(B)		
(C)		
(D)		

Q7. An organic compound has the structural formula



The IUPAC name for this compound is

- A. 4 - chloro - 4 - methyl - 1 - heptene
- B. 4 - chloro - 4 - methyl - 6 - heptene
- C. 4 - chloro - 4 - propyl - 1 - pentene
- D. 4 - chloro - 4 - methyl - 1 - heptyne

Q8. The solubilities of tetrachloromethane in the given solvents, in **increasing** order (least soluble first, most soluble last) are

- A. ethanol; water; chloromethane; octane
- B. water; ethanol; chloromethane; octane
- C. chloromethane; octane; ethanol; water
- D. octane; chloromethane; ethanol; water

Q9. Many carbon compounds contain oxygen.

A $\text{CH}_3 - \text{CH}_2 - \underset{\text{H}}{\text{C}} = \text{O}$	B $\text{CH}_3 - \text{CH}_2 - \text{O} - \text{CH}_3$
C $\text{CH}_3 - \text{O} - \underset{\text{O}}{\text{C}} - \text{CH}_3$	D $\text{CH}_3 - \underset{\text{O}}{\text{C}} - \text{CH}_3$
E $\text{CH}_3 - \text{CH}_2 - \underset{\text{O}-\text{H}}{\text{C}} = \text{O}$	F $\text{CH}_3 - \underset{\text{OH}}{\text{CH}} - \text{CH}_3$

The compound which could be oxidised to form the compound in box D is

- A. A B. C C. F D. E

Q10. Bromine reacts with both ethane and ethene. A difference in the two reactions is

- A. hydrogen gas is produced with ethane, but not with ethene
B. reaction with ethane is much slower than with ethene.
C. hydrogen bromide gas is produced with ethene, but not with ethane
D. reaction with ethene occurs only in sunlight

END OF PART A

PART B: SHORT ANSWER QUESTIONS (15 marks)

Q11. In the margarine industry, alkenes are often hydrogenated to convert unsaturated oils into solid fats that have a greater proportion of saturated molecules.

- A. Using ethene as an example, write an equation for this reaction and state the type of reaction this represents.

Equation: _____

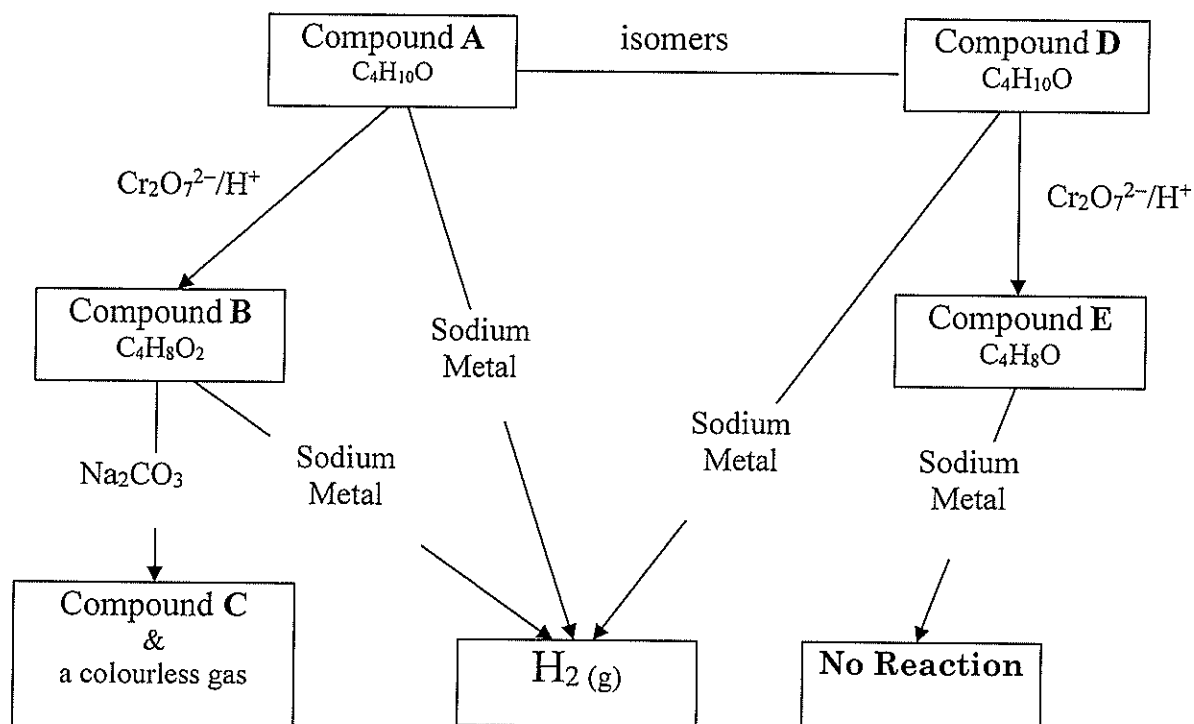
Type of Reaction: _____

(2 marks)

- B. Describe a test that could be used to confirm that all the ethene has been converted.

(3 marks)

Q12. Consider the following reaction sequences



Draw structural formulae (showing all bonds) and give the IUPAC (systematic name) of the compounds A, B, C, D and E.

Compound	Structural Formula	IUPAC Name
A		
B		
C		
D		
E		

(10 marks)

CARBON CHEMISTRY:

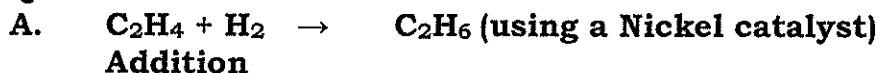
Answer all questions

PART A: MULTIPLE CHOICE QUESTIONS (10 marks)

1D	2B	3D	4C	5A	6D	7A	8B	9C	10B
----	----	----	----	----	----	----	----	----	-----

PART B: SHORT ANSWER QUESTIONS (15 marks)

Q11.



B. Add bromine water/solution ($\text{Br}_{2(\text{aq})/(\text{soln.})}$)

If hydrogen has been added to all of the double bonds in the compound, it becomes saturated, the brown solution will remain brown. This indicates that there are no double bonds present.

If hydrogen has not added to all of the double bonds in the compound, it remains (is still) unsaturated, the brown solution will turn colourless. This indicates that there are still double bonds present.

Q12.

Compound	Structural Formula	IUPAC Name
A	$ \begin{array}{cccc} \text{H} & \text{H} & \text{H} & \text{H} \\ & & & \\ \text{H}-\text{C}-\text{C}-\text{C}-\text{C}-\text{O}-\text{H} \\ & & & \\ \text{H} & \text{H} & \text{H} & \text{H} \end{array} $	Butanol
B	$ \begin{array}{cccc} \text{H} & \text{H} & \text{H} & \\ & & & \\ \text{H}-\text{C}-\text{C}-\text{C}-\text{C}=\text{O} \\ & & & \\ \text{H} & \text{H} & \text{H} & \text{O}-\text{H} \end{array} $	Butanoic acid
C	$ \left[\begin{array}{cccc} \text{H} & \text{H} & \text{H} & \\ & & & \\ \text{H}-\text{C}-\text{C}-\text{C}-\text{C}=\text{O} \\ & & & \\ \text{H} & \text{H} & \text{H} & \text{O} \end{array} \right]^- \left[\text{Na} \right]^+ $	Sodium butanoate
D	$ \begin{array}{cccc} \text{H} & \text{H} & \text{OH} & \text{H} \\ & & & \\ \text{H}-\text{C}-\text{C}-\text{C}-\text{C}-\text{H} \\ & & & \\ \text{H} & \text{H} & \text{H} & \text{H} \end{array} $	2-butanol
E	$ \begin{array}{cccc} \text{H} & \text{H} & \text{O} & \text{H} \\ & & & \\ \text{H}-\text{C}-\text{C}-\text{C}-\text{C}-\text{H} \\ & & & \\ \text{H} & \text{H} & & \text{H} \end{array} $	Butanone

(10 marks)

weak and require only a small amount of energy to overcome them, hence the low boiling point of $-0.5\text{ }^{\circ}\text{C}$.

In propanal and methyl methanoate, an O atom is bonded to a C atom. Since the difference in electronegativity between C and O is significant, the bonding here will be polar. Dipole/dipole forces will exist between adjacent molecules along with dispersion forces. These dipole/dipole forces are stronger than the dispersion forces and will require more energy to break than just the dispersion forces between butane molecules, hence the higher boiling points of propanal ($48\text{ }^{\circ}\text{C}$) and methyl methanoate ($32\text{ }^{\circ}\text{C}$).

In propanol and propanoic acid, an O is bonded to a C but more importantly there is an H atom bonded directly to an O atom. The difference in electronegativity between O and H is significant (O is a very small, very electronegative atom); the $-\text{O}-\text{H}$ bond is very polar. Hydrogen bonding (strongest of the intermolecular forces) will exist between adjacent molecules along with dispersion forces. These hydrogen bonds are stronger than the dipole/dipole forces and will require a significant amount of energy to break than the intermolecular forces between propanal and methylmethanoate, hence the very high boiling points of propanol ($97\text{ }^{\circ}\text{C}$) and propanoic acid ($118\text{ }^{\circ}\text{C}$).

The difference between the boiling points of propanol and propanoic acid is that propanol only forms one hydrogen bond per molecule while propanoic acid forms two hydrogen bonds per molecule.

10

